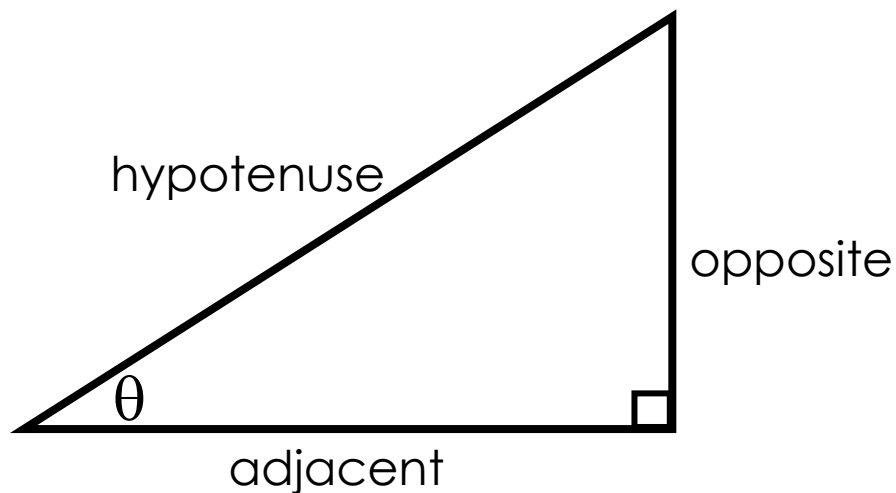


Name: \_\_\_\_\_ Date: \_\_\_\_\_

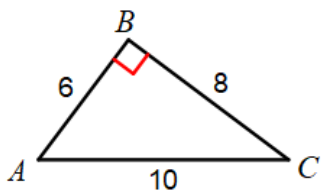
### Trigonometry Ratios



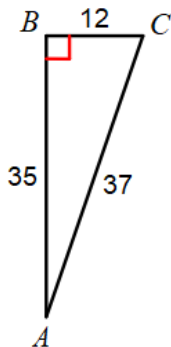
Sine	Cosine	Tangent
SOH	CAH	TOA

Find the value of each trig ratio.

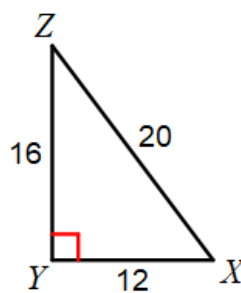
1.  $\tan A$



2.  $\sin C$



3.  $\cos Z$



4.  $\tan X$

